

Name _____ Group _____ Score _____

Moon Phases Test 2

Begin with Waxing Crescent and draw the next phases of the moon.

Waxing Crescent							
--------------------	--	--	--	--	--	--	--

Draw where the Sun, Earth, and Moon are at Third Quarter.

--









How many days between each of the 8 phases of the moon? _____

How many days between one new moon and the next new moon? _____

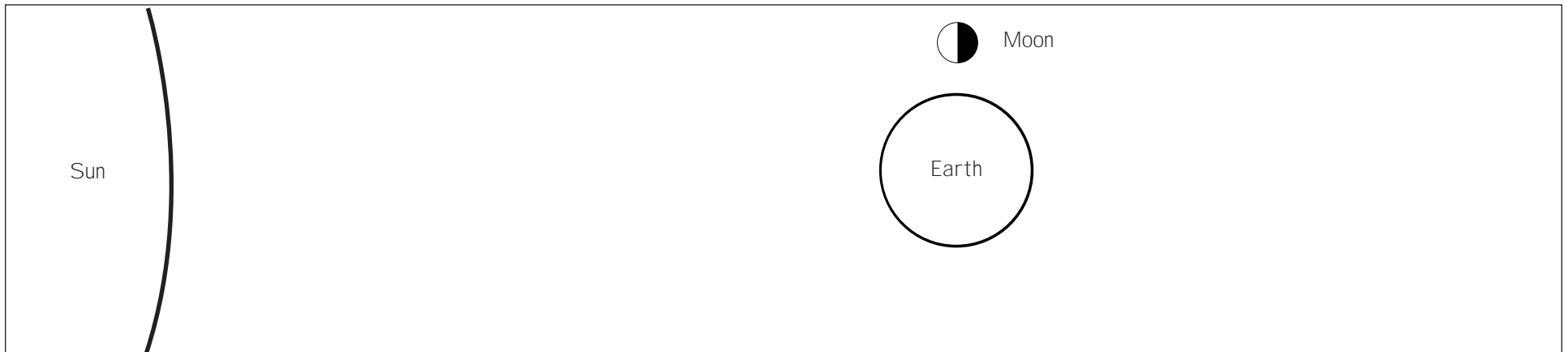
Name _____ Group _____ Score _____

Moon Phases Test 2 (Key)

Begin with Waxing Crescent and draw the next phases of the moon.

							
Waxing Crescent	First Quarter	Waxing Gibbous	Full	Waning Gibbous	Third Quarter	Waning Crescent	New

Draw where the Sun, Earth, and Moon are at Third Quarter.



How many days between each of the 8 phases of the moon? 3 1/2 Days

How many days between one new moon and the next new moon? 1 month or 29 days