

Name \_\_\_\_\_ Group \_\_\_\_\_ Score \_\_\_\_\_

## *Moon Phases Test 5*

Begin with Full Moon and draw the next phases of the moon.

Full							
------	--	--	--	--	--	--	--

Draw where the Sun, Earth, and Moon are at First Quarter.











How many days between each of the 8 phases of the moon? \_\_\_\_\_

How many days between one first quarter moon and the next first quarter moon? \_\_\_\_\_

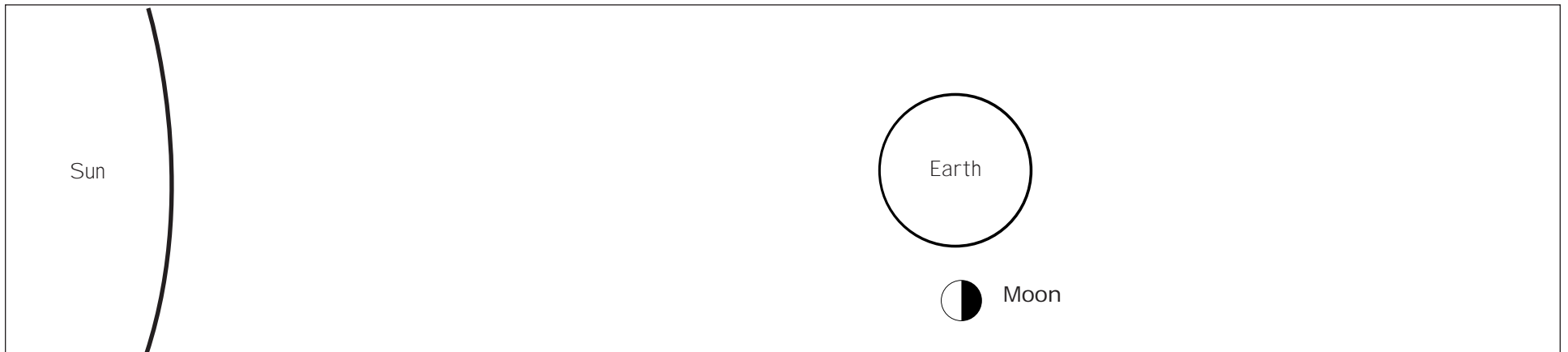
Name \_\_\_\_\_ Group \_\_\_\_\_ Score \_\_\_\_\_

### *Moon Phases Test 5 (Key)*

Begin with Full Moon and draw the next phases of the moon.

							
Full	Waning Gibbous	Third Quarter	Waning Crescent	New	Waxing Crescent	First Quarter	Waxing Gibbous

Draw where the Sun, Earth, and Moon are at First Quarter.



How many days between each of the 8 phases of the moon? 3 1/2 Days

How many days between one first quarter moon and the next first quarter moon? 1 month or 29 days