

Name _____ Group _____ Score _____

Moon Phases Test 6

Begin with Third Quarter and draw the next phases of the moon.

Third Quarter							
------------------	--	--	--	--	--	--	--

Draw where the Sun, Earth, and Moon are at Third Quarter.











How many days between each of the 8 phases of the moon? _____

How many days between third quarter moon and the next third quarter moon? _____

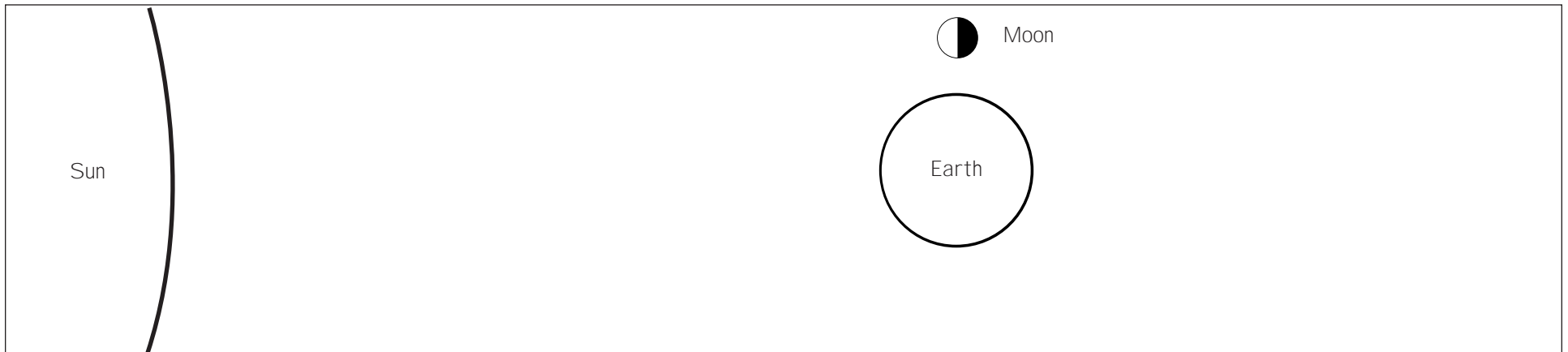
Name _____ Group _____ Score _____

Moon Phases Test 6 (Key)

Begin with Third Quarter and draw the next phases of the moon.

							
Third Quarter	Waning Crescent	New	Waxing Crescent	First Quarter	Waxing Gibbous	Full	Waning Gibbous

Draw where the Sun, Earth, and Moon are at Third Quarter.



How many days between each of the 8 phases of the moon? 3 1/2 Days

How many days between third quarter moon and the next third quarter moon? 1 month or 29 days