

Name _____ Group _____ Score _____

Moon Phases Test 7

Begin with Waning Gibbous and draw the next phases of the moon.

Waning Gibbous							
-------------------	--	--	--	--	--	--	--

Draw where the Sun, Earth, and Moon are at Full Moon.









How many days between each of the 8 phases of the moon? _____

How many days between full moon and the next full moon? _____

Name _____ Group _____ Score _____

Moon Phases Test 7 (Key)

Begin with Waning Gibbous and draw the next phases of the moon.

							
Waning Gibbous	Third Quarter	Waning Crescent	New	Waxing Crescent	First Quarter	Waxing Gibbous	Full

Draw where the Sun, Earth, and Moon are at Full Moon.



How many days between each of the 8 phases of the moon? 3 1/2 Days

How many days between one full moon and the next full moon? 1 month or 29 days